

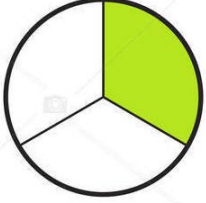
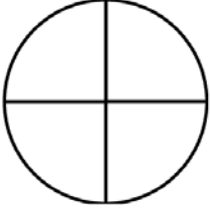
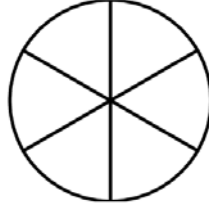
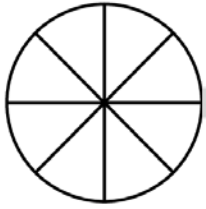
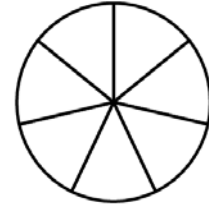
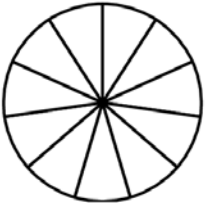
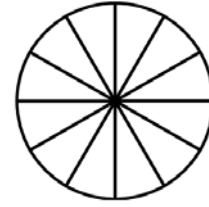
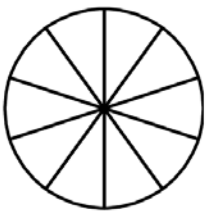
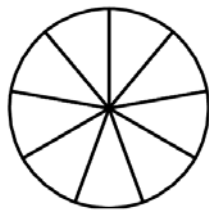


Adı Soyadı :

Numarası :

Konu: Birim Kesirleri Karşılaştırma ve Sıralama Etkinliği 3

Aynı büyüklükte verilen bütünlerin birim kesir kadarını boyayarak kesirlerden büyük olanı örnekteki gibi işaretleyelim.


☒ $\frac{1}{3}$
☐ $\frac{1}{5}$

☐ $\frac{1}{4}$

☐ $\frac{1}{6}$

☐ $\frac{1}{8}$

☐ $\frac{1}{7}$

☐ $\frac{1}{11}$

☐ $\frac{1}{12}$

☐ $\frac{1}{10}$

☐ $\frac{1}{9}$


Aynı büyüklükte verilen bütünlerin birim kesir kadarını boyayarak kesirlerden küçük olanı işaretleyelim.


☐ $\frac{1}{6}$



☐ $\frac{1}{4}$

☐ $\frac{1}{5}$

☐ $\frac{1}{3}$

☐ $\frac{1}{9}$

☐ $\frac{1}{8}$

☐ $\frac{1}{8}$

☐ $\frac{1}{10}$

☐ $\frac{1}{14}$

☐ $\frac{1}{12}$

Aşağıdaki kesirlerden küçük olanı işaretleyelim.

$$\frac{1}{3} \quad \frac{1}{5} \quad \frac{1}{4}$$

☐ ☐ ☐

$$\frac{1}{10} \quad \frac{1}{8} \quad \frac{1}{9}$$

☐ ☐ ☐

$$\frac{1}{13} \quad \frac{1}{15} \quad \frac{1}{11}$$

☐ ☐ ☐

$$\frac{1}{6} \quad \frac{1}{7} \quad \frac{1}{8}$$

☐ ☐ ☐

$$\frac{1}{15} \quad \frac{1}{20} \quad \frac{1}{18}$$

☐ ☐ ☐

$$\frac{1}{6} \quad \frac{1}{8} \quad \frac{1}{5}$$

☐ ☐ ☐

Aşağıdaki kesirlerden büyük olanı işaretleyelim.

$$\frac{1}{5} \quad \frac{1}{8} \quad \frac{1}{4}$$

☐ ☐ ☐

$$\frac{1}{8} \quad \frac{1}{10} \quad \frac{1}{12}$$

☐ ☐ ☐

$$\frac{1}{10} \quad \frac{1}{9} \quad \frac{1}{11}$$

☐ ☐ ☐

$$\frac{1}{6} \quad \frac{1}{9} \quad \frac{1}{8}$$

☐ ☐ ☐

$$\frac{1}{12} \quad \frac{1}{17} \quad \frac{1}{20}$$

☐ ☐ ☐

$$\frac{1}{9} \quad \frac{1}{7} \quad \frac{1}{10}$$

☐ ☐ ☐

Aşağıdaki kesirleri büyükten küçüğe doğru sıralayınız.

$$\frac{1}{3} \quad \frac{1}{4} \quad \frac{1}{2} \rightarrow \frac{\dots}{\dots} > \frac{\dots}{\dots} > \frac{\dots}{\dots}$$

$$\frac{1}{9} \quad \frac{1}{13} \quad \frac{1}{11} \rightarrow \frac{\dots}{\dots} > \frac{\dots}{\dots} > \frac{\dots}{\dots}$$

$$\frac{1}{10} \quad \frac{1}{7} \quad \frac{1}{9} \rightarrow \frac{\dots}{\dots} > \frac{\dots}{\dots} > \frac{\dots}{\dots}$$

$$\frac{1}{15} \quad \frac{1}{17} \quad \frac{1}{13} \rightarrow \frac{\dots}{\dots} > \frac{\dots}{\dots} > \frac{\dots}{\dots}$$

Aşağıdaki kesirleri küçükten büyüğe doğru sıralayınız.

$$\frac{1}{7} \quad \frac{1}{5} \quad \frac{1}{6} \rightarrow \frac{\dots}{\dots} > \frac{\dots}{\dots} > \frac{\dots}{\dots}$$

$$\frac{1}{4} \quad \frac{1}{8} \quad \frac{1}{6} \rightarrow \frac{\dots}{\dots} > \frac{\dots}{\dots} > \frac{\dots}{\dots}$$

$$\frac{1}{15} \quad \frac{1}{30} \quad \frac{1}{20} \rightarrow \frac{\dots}{\dots} > \frac{\dots}{\dots} > \frac{\dots}{\dots}$$

$$\frac{1}{18} \quad \frac{1}{28} \quad \frac{1}{8} \rightarrow \frac{\dots}{\dots} > \frac{\dots}{\dots} > \frac{\dots}{\dots}$$