

VERİLMİYEN TOPLANANI BULMA



Aşağıda verilen toplama işlemlerinde verilmeyen toplananları bulalım.

$$\begin{array}{r} \square \\ + 8 \\ \hline 16 \end{array}$$
$$\begin{array}{r} 4 \\ + \square \\ \hline 9 \end{array}$$
$$\begin{array}{r} 12 \\ + \square \\ \hline 18 \end{array}$$

$$\begin{array}{r} \square \\ + 7 \\ \hline 13 \end{array}$$
$$\begin{array}{r} 6 \\ + \square \\ \hline 8 \end{array}$$
$$\begin{array}{r} \square \\ + 8 \\ \hline 17 \end{array}$$
$$\begin{array}{r} \square \\ + 9 \\ \hline 14 \end{array}$$
$$\begin{array}{r} \square \\ + 3 \\ \hline 17 \end{array}$$

$$\begin{array}{r} 13 \\ + \square \\ \hline 18 \end{array}$$
$$\begin{array}{r} \square \\ + 10 \\ \hline 20 \end{array}$$
$$\begin{array}{r} 14 \\ + \square \\ \hline 20 \end{array}$$
$$\begin{array}{r} 13 \\ + \square \\ \hline 13 \end{array}$$
$$\begin{array}{r} \square \\ + 8 \\ \hline 19 \end{array}$$

$$\begin{array}{r} \square \\ + 0 \\ \hline 15 \end{array}$$
$$\begin{array}{r} 12 \\ + \square \\ \hline 16 \end{array}$$
$$\begin{array}{r} 16 \\ + \square \\ \hline 19 \end{array}$$
$$\begin{array}{r} \square \\ + 7 \\ \hline 16 \end{array}$$

*Harikasınız
çocuklar*

Aşağıdaki toplama işlemlerinde verilmeyen toplananı bulup yazalım.

$$\square + 4 = 8$$

$$5 + \square = 9$$

$$3 + \square = 5$$

$$\square + 6 = 7$$

$$\square + 5 = 11$$

$$3 + \square = 10$$

$$2 + \square = 4$$

$$\square + 9 = 12$$

$$4 + \square = 6$$

$$7 + \square = 13$$

$$\square + 3 = 3$$

$$10 + \square = 14$$

$$\square + 8 = 15$$

$$9 + \square = 16$$

$$1 + \square = 2$$

$$13 + \square = 17$$








$$\square + 1 = 1$$

$$16 + \square = 19$$








$$\square + 9 = 18$$

$$14 + \square = 20$$


Aşağıdaki toplama işlemlerinde verilmeyen toplananı bulup yazalım.



@zehra_ogrtmn



VERİLMİYEN TOPLANANI BULMA



Aşağıda verilen toplama işlemlerinde verilmeyen toplananları bulalım.

$$\begin{array}{r} \square \\ + 8 \\ \hline 16 \end{array}$$

$$\begin{array}{r} 4 \\ + \square \\ \hline 9 \end{array}$$

$$\begin{array}{r} 12 \\ + \square \\ \hline 18 \end{array}$$

$$\begin{array}{r} \square \\ + 7 \\ \hline 13 \end{array}$$

$$\begin{array}{r} 6 \\ + \square \\ \hline 8 \end{array}$$

$$\begin{array}{r} \square \\ + 8 \\ \hline 17 \end{array}$$

$$\begin{array}{r} \square \\ + 9 \\ \hline 14 \end{array}$$

$$\begin{array}{r} \square \\ + 3 \\ \hline 17 \end{array}$$

$$\begin{array}{r} 13 \\ + \square \\ \hline 18 \end{array}$$

$$\begin{array}{r} \square \\ + 10 \\ \hline 20 \end{array}$$

$$\begin{array}{r} 14 \\ + \square \\ \hline 20 \end{array}$$

$$\begin{array}{r} 13 \\ + \square \\ \hline 13 \end{array}$$

$$\begin{array}{r} \square \\ + 8 \\ \hline 19 \end{array}$$

$$\begin{array}{r} \square \\ + 0 \\ \hline 15 \end{array}$$

$$\begin{array}{r} 12 \\ + \square \\ \hline 16 \end{array}$$

$$\begin{array}{r} 16 \\ + \square \\ \hline 19 \end{array}$$

$$\begin{array}{r} \square \\ + 7 \\ \hline 16 \end{array}$$

*Harikasınız
çocuklar*

Aşağıdaki toplama işlemlerinde verilmeyen toplananı bulup yazalım.

$$\square + 4 = 8$$

$$5 + \square = 9$$

$$3 + \square = 5$$

$$\square + 6 = 7$$

$$\square + 5 = 11$$

$$3 + \square = 10$$

$$2 + \square = 4$$

$$\square + 9 = 12$$

$$4 + \square = 6$$

$$7 + \square = 13$$

$$\square + 3 = 3$$

$$10 + \square = 14$$

$$\square + 8 = 15$$

$$9 + \square = 16$$

$$1 + \square = 2$$

$$13 + \square = 17$$









$$\square + 1 = 1$$

$$16 + \square = 19$$

$$\square + 9 = 18$$

$$14 + \square = 20$$

Aşağıdaki toplama işlemlerinde verilmeyen toplananı bulup yazalım.



@zehra_ogrtmn

