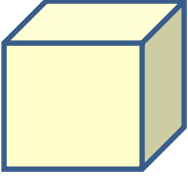


Adı : .....

Soyadı: .....

4. Sınıf  
Matematik

Geometrik Şekiller-4  
Küpün Açınımı



Ön  
yüz

Arka  
yüz

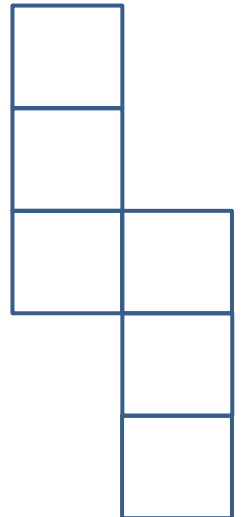
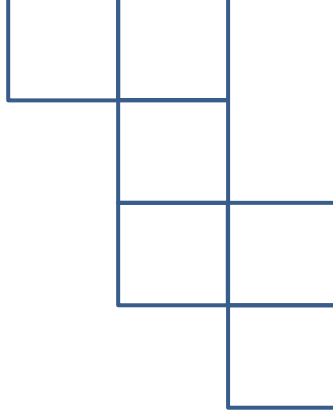
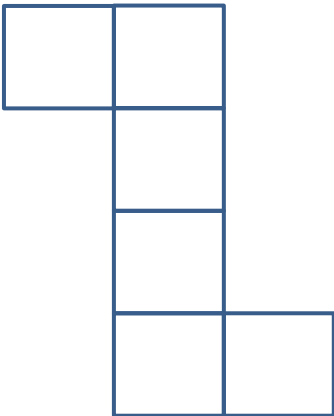
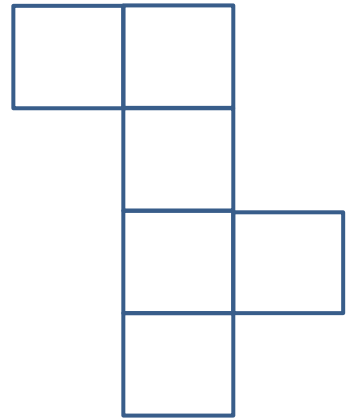

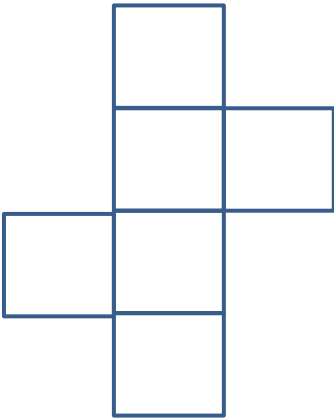
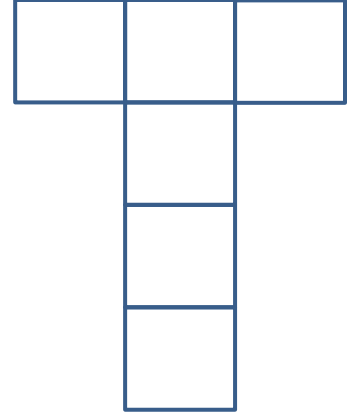
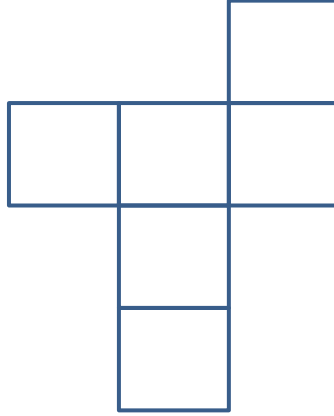

Üst  
yüz

Alt  
yüz

Sağ  
yüz

Sol  
yüz

Açınımı verilen küplerin karşılıklı yüzlerini aynı renge boyayınız.



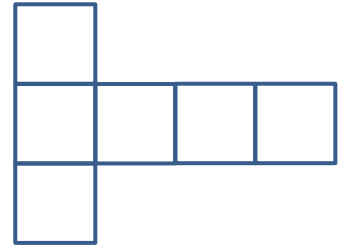
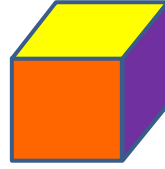
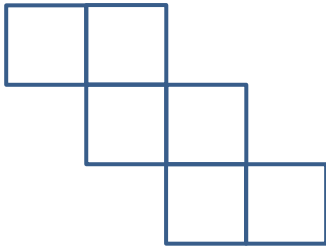
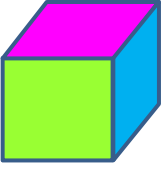
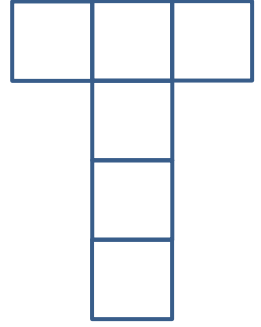
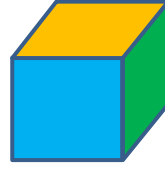
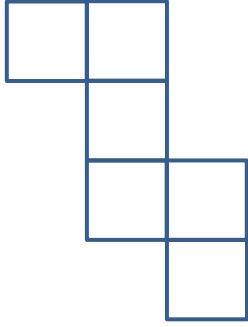
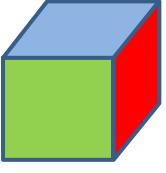
Adı : .....

Soyadı: .....

4. Sınıf  
Matematik

Geometrik Şekiller-4  
Küpün Açınımı

Küpe göre açınımını boyayınız. (Not: Karşılıklı yüzler aynı renktir?)



Açınımı verilen küpleri eşleştirelim.

