

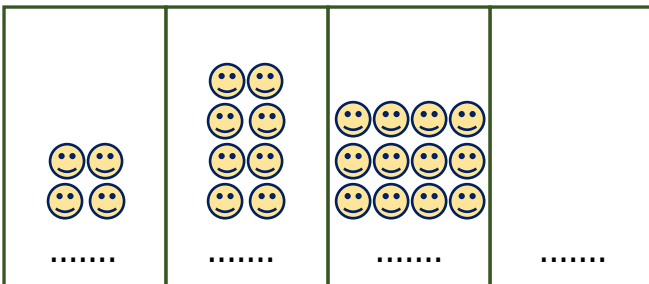
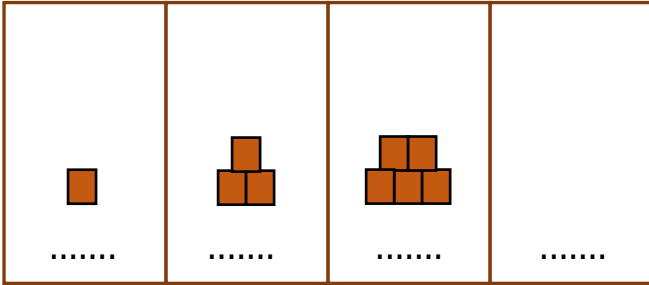
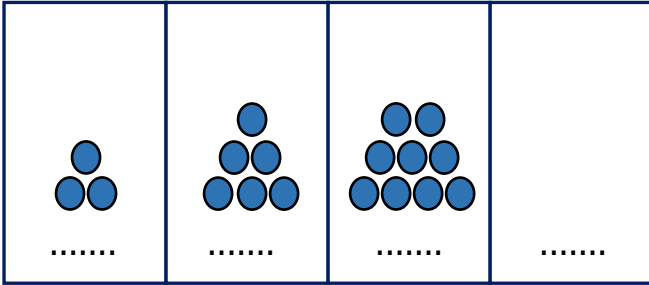
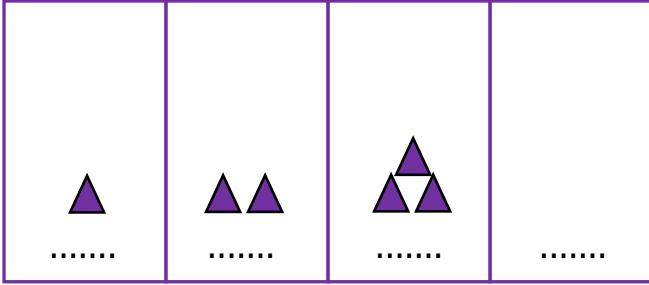
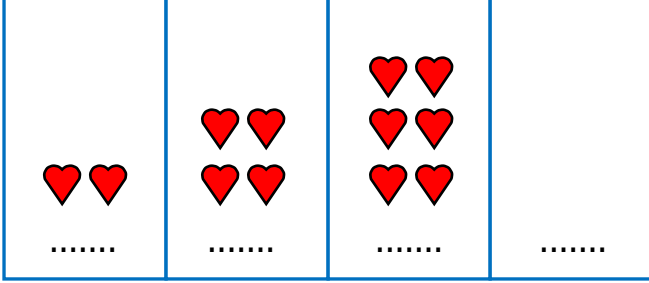


Adı Soyadı : .....

Numarası : .....

### Konu: Sayılarla Örüntü Oluşturalım 3

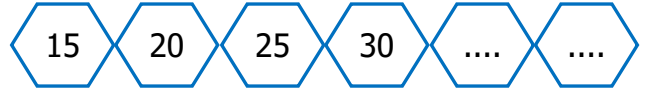
Aşağıda verilen sayı örüntülerini modelleyerbirer adım ilerletelim.



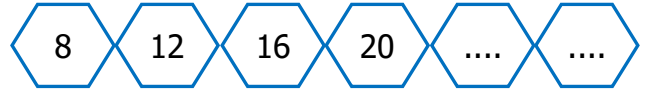
Aşağıdaki örüntünün kuralını belirleyip bir sonraki adımda yazılması gereken sayıyı yazalım.



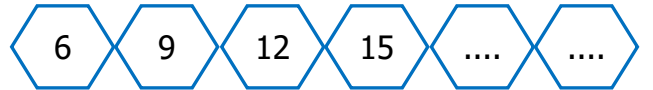
Kural: .....



Kural: .....



Kural: .....



Kural: .....

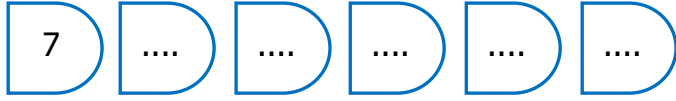


Kural: .....

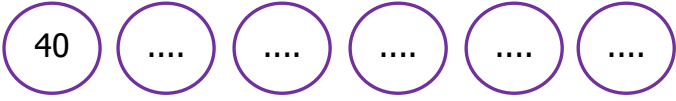


Kural: .....

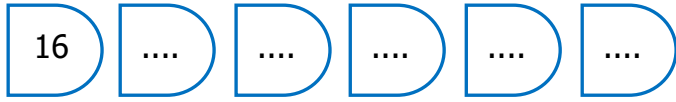
Aşağıda verilen sayılardan başlayarak kuralına uygun olarak örüntüyü devam ettiriniz.



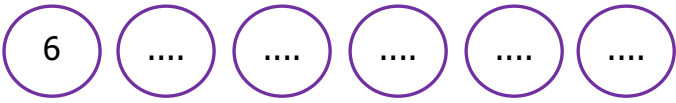
**Kural:** 2 artan



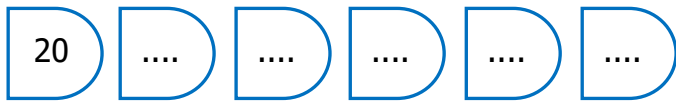
**Kural:** 3 azalan



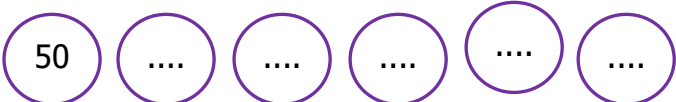
**Kural:** 5 artan



**Kural:** 3 artan, 1 azalan



**Kural:** 10 artan, 1 azalan



**Kural:** 4 azalan



**Kural:** 2 artan

Aşağıdaki örüntülerde noktalı yerlere uygun sayıları yazınız.

