
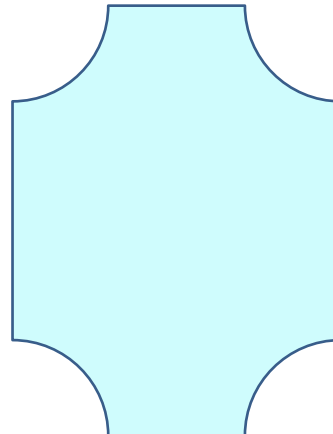
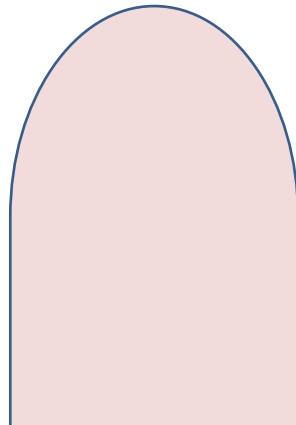
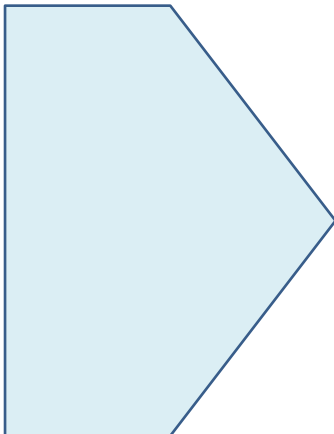
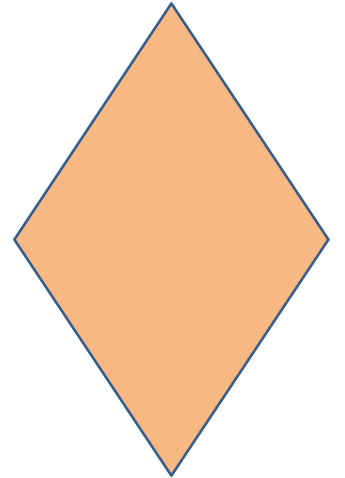
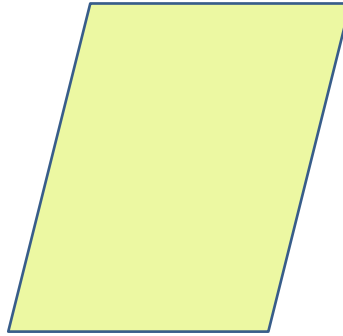
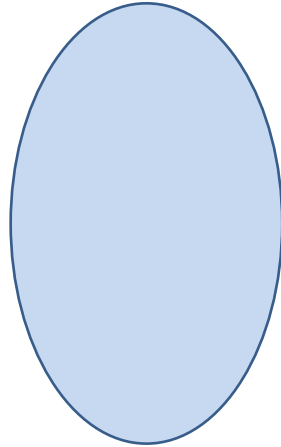

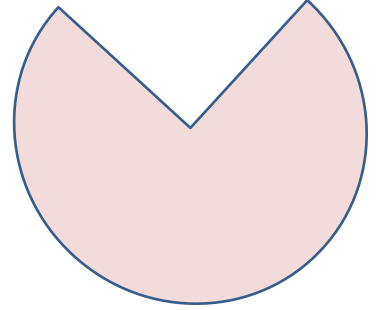

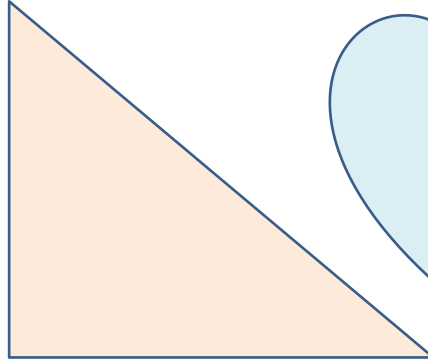

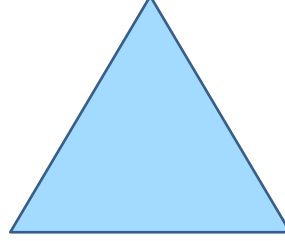

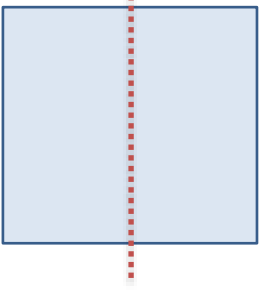


Adı :
Soyadı:

2. Sınıf Matematik

Simetri-1

Aşağıdaki şekilleri örnekteki gibi tam ortadan çizgi çiziniz. Şekilleri kenarlarından kesiniz. Kestiğiniz parçaları çizgilerinden ikiye katlayınız.

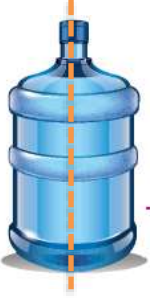


Adı :
Soyadı:

2. Sınıf
Matematik

Simetri-1

Aşağıdaki varlıkları örnekteki gibi tam ortadan iki eşit parçaya bölünüz.



Aşağıdaki rakamları tam ortadan iki eşit parçaya bölünüz.

1

2

3

4

5

6

7

8

9

0

Simetri olan rakamlar:

.....

Simetri olmayan rakamlar:

.....

Adı :
Soyadı:

2. Sınıf Matematik

Simetri-1

Aşağıdaki şekilleri tamamlayarak boyayınız.

