

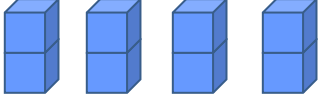
Adı : .....

Soyadı: .....

## 2. Sınıf Matematik

## Çarpma İşlemi-2

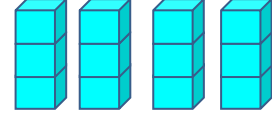
Kaç tane nesne olduğunu örnekteki gibi hesaplayınız.



4 tane 2 = 8 eder.

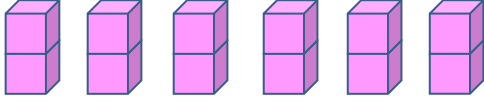
$$4 \times 2 = 8$$

Kaç tane nesne olduğunu örnekteki gibi hesaplayınız.



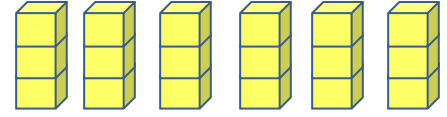
.....

.....



.....

.....



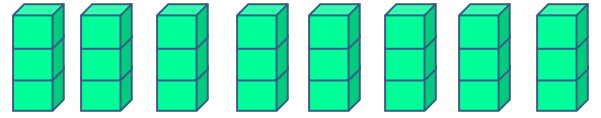
.....

.....



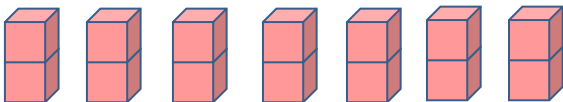
.....

.....



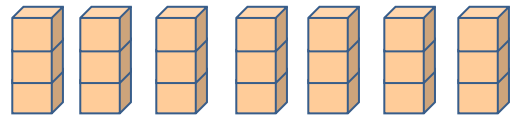
.....

.....



.....

.....



.....

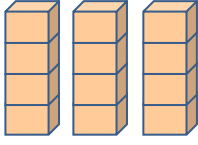
.....

Adı : .....

Soyadı: .....

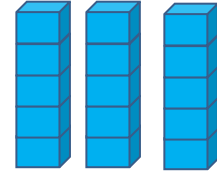
## 2. Sınıf Matematik

## Çarpma İşlemi-2

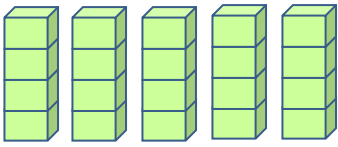


3 tane 4 = 12 eder.

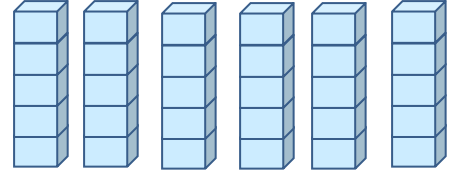
$$3 \times 4 = 12$$



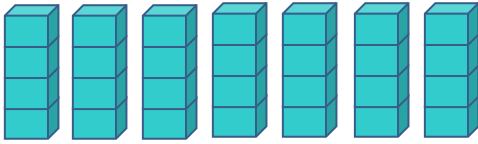
.....  
.....



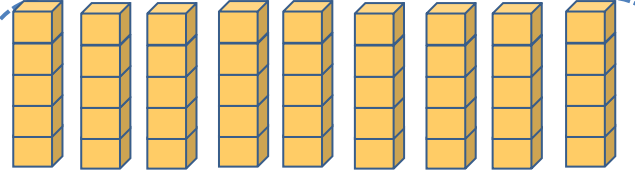
.....  
.....



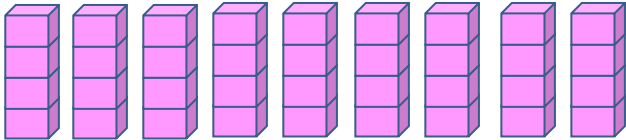
.....  
.....



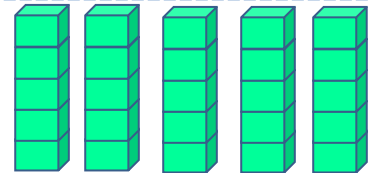
.....  
.....



.....  
.....



.....  
.....



.....  
.....