

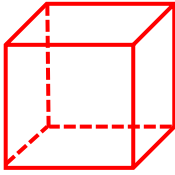
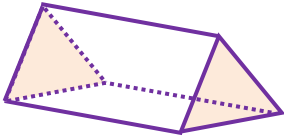
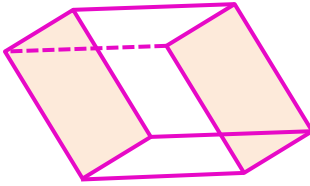
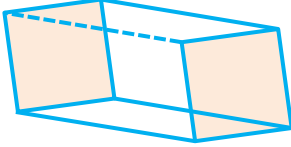

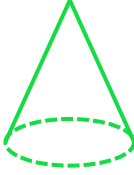
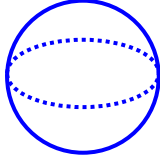
Adı :

Soyadı:

3. Sınıf
Matematik

Geometrik Şekiller ve
Cisimler-2

Geometrik cisimlerle ilgili tabloyu doldurunuz.

Geometrik Cisim	Adı	Köşe Sayısı	Ayırıt Sayısı	Yüz Sayısı
				
				
				
				
				
				
				

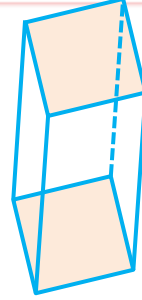
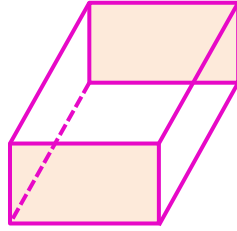
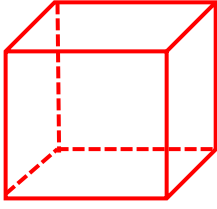
Adı :

Soyadı:

3. Sınıf
Matematik

Geometrik Şekiller ve
Cisimler-2

Aşağıdaki geometrik şekillerin benzer ve farklı yönlerini yazalım.

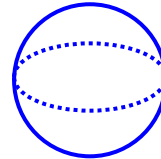
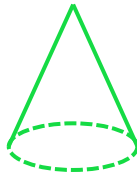


Benzer Yönleri

- 1-
- 2-
- 3-

Farklı Yönleri

- 1-
- 2-
- 3-



Benzer Yönleri

- 1-
- 2-

Farklı Yönleri

- 1-
- 2-