

Adı :

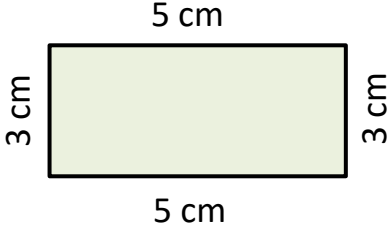
Soyadı:

3. Sınıf Matematik

Çevre Ölçme-3

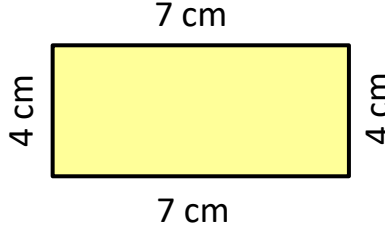
Aşağıdaki dikdörtgenlerin çevresini hesaplayınız. (Gerçek ölçüler değildir.)

Not: Dikdörtgenin karşılıklı kenar uzunlukları birbirine eşittir.



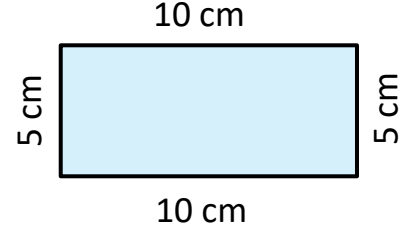
$$\mathcal{C} = 5+5+3+3$$

$$\mathcal{C} = 16 \text{ cm}$$



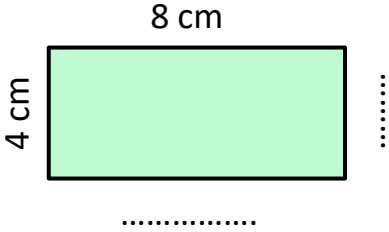
$$\mathcal{C} = \dots\dots\dots$$

$$\mathcal{C} = \dots\dots\dots$$



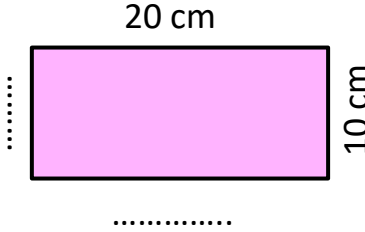
$$\mathcal{C} = \dots\dots\dots$$

$$\mathcal{C} = \dots\dots\dots$$



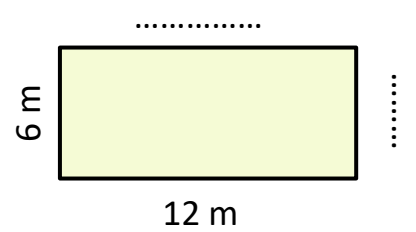
$$\mathcal{C} = \dots\dots\dots$$

$$\mathcal{C} = \dots\dots\dots$$



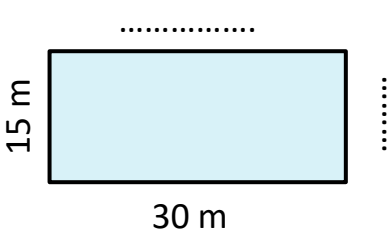
$$\mathcal{C} = \dots\dots\dots$$

$$\mathcal{C} = \dots\dots\dots$$



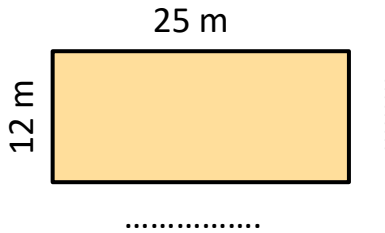
$$\mathcal{C} = \dots\dots\dots$$

$$\mathcal{C} = \dots\dots\dots$$



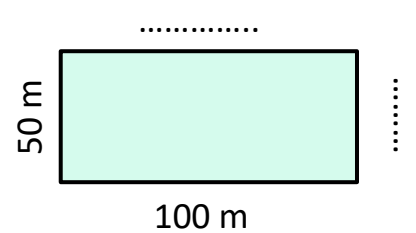
$$\mathcal{C} = \dots\dots\dots$$

$$\mathcal{C} = \dots\dots\dots$$



$$\mathcal{C} = \dots\dots\dots$$

$$\mathcal{C} = \dots\dots\dots$$



$$\mathcal{C} = \dots\dots\dots$$

$$\mathcal{C} = \dots\dots\dots$$

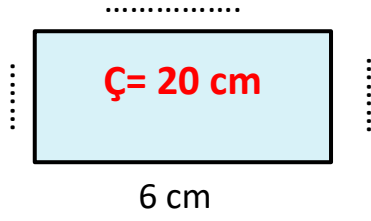
Adı :

Soyadı:

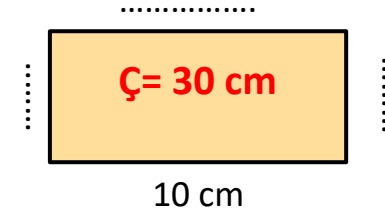
3. Sınıf Matematik

Çevre Ölçme-3

Çevresinin uzunluğu verilen dikdörtgenin kenar uzunluklarını bulunuz.



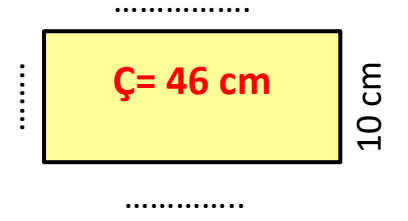
$$6 + 6 = 12$$
$$20 - 12 = 8$$
$$8 \div 2 = 4$$



.....

.....

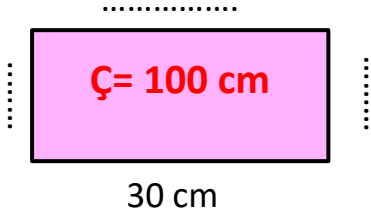
.....



.....

.....

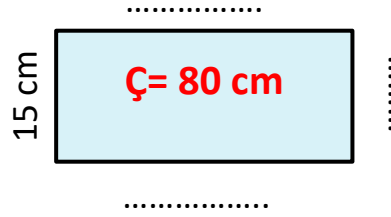
.....



.....

.....

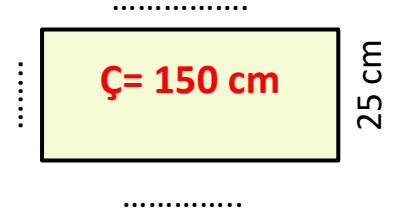
.....



.....

.....

.....



.....

.....

.....



1- Yiğit dikdörtgen şeklinde olan okulun etrafında bir tur koşuyor. Yiğit 200 metre koştuğuna göre okulun kısa kenarı kaç metredir?

2- Eğer okulun şekli kare olsaydı Yiğit en fazla kaç metre koşmuş olurdu?