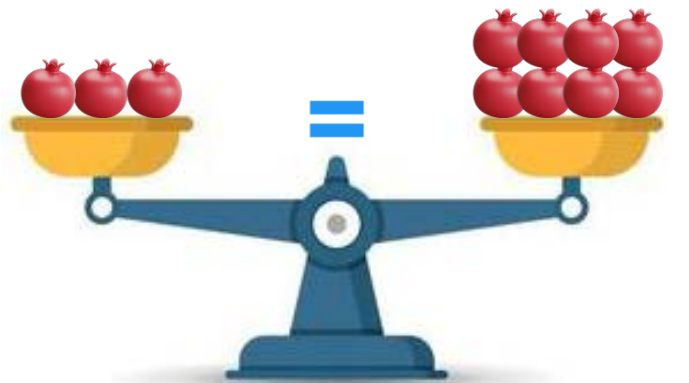
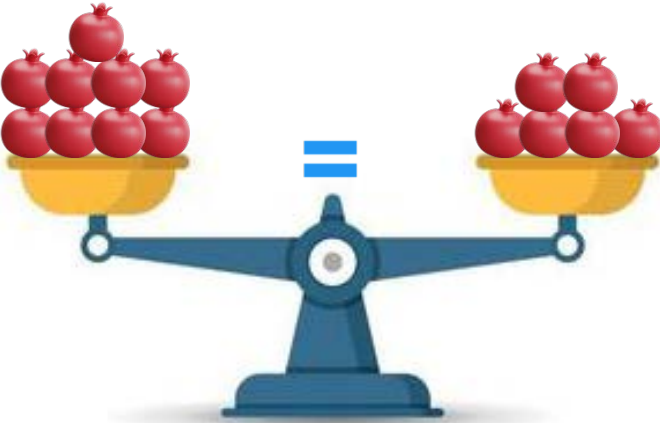
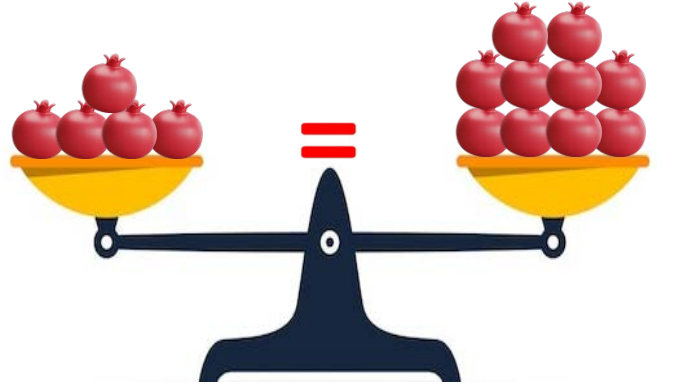
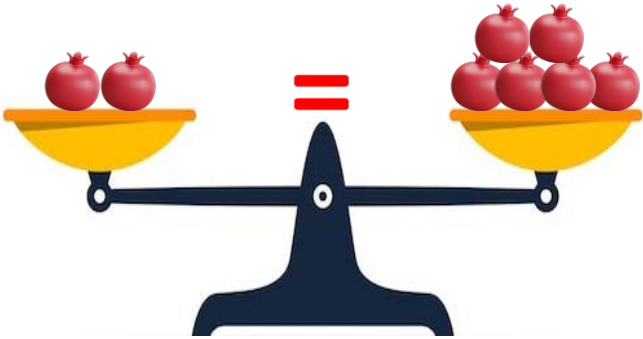

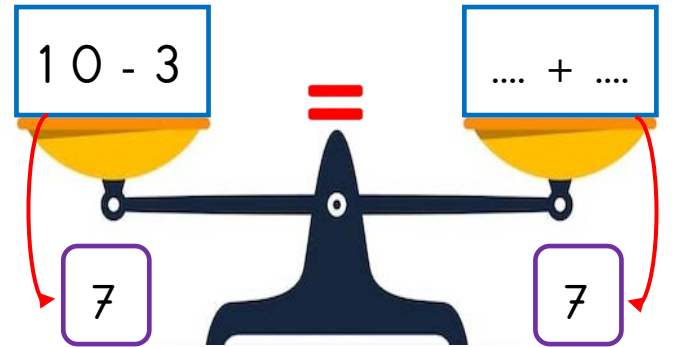
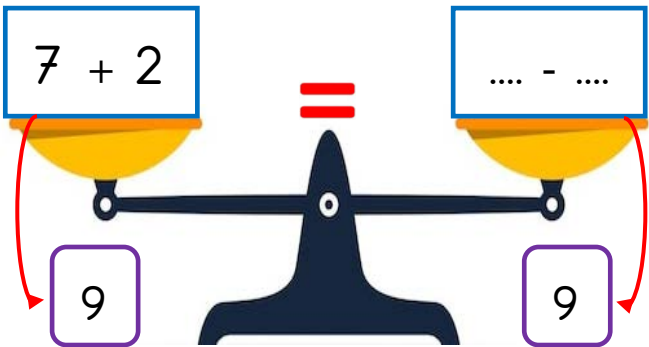
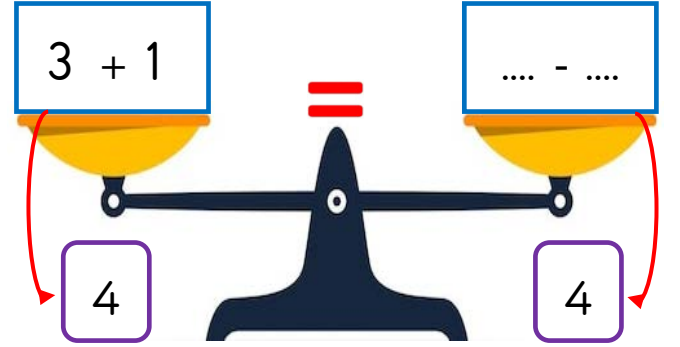
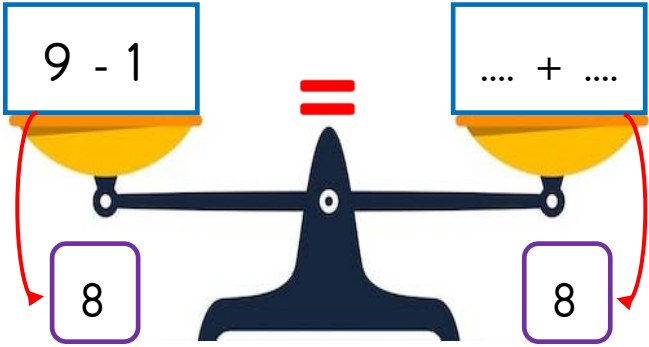
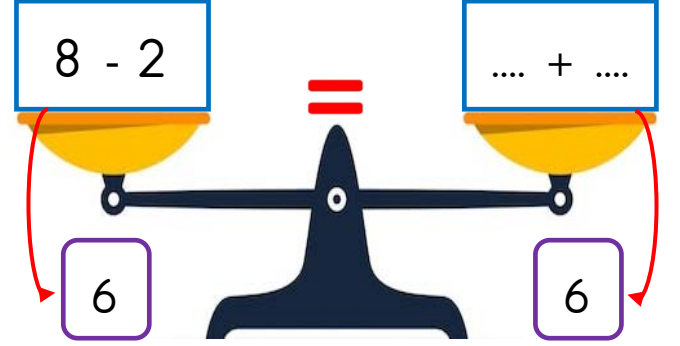
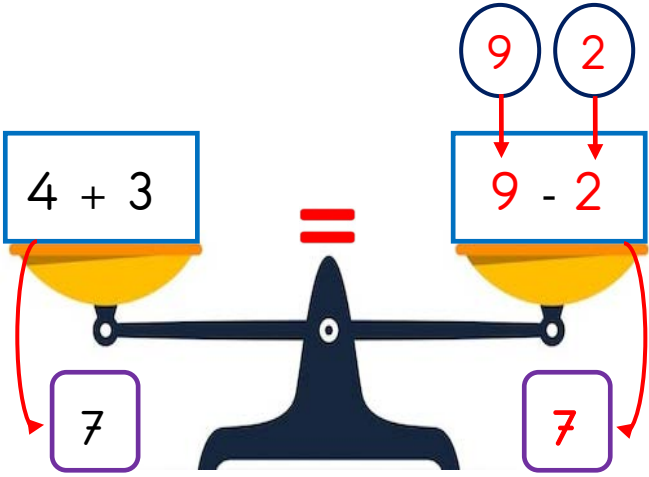


EŞİTLİK KAVRAMI - 2

Terazinin kefelerindeki narları eşitleyelim. Buna göre kefelerde fazla olan narlardan kaç tane alınmalıdır? Örnekteki gibi gösteriniz.?



Aşağıdaki eşitliklerde boş bırakılan yerlere hangi sayılar gelmelidir? Örnekteki gibi yapınız.



Aşağıdaki eşitliklerde boş bırakılan yerlere hangi sayılar gelmelidir?

$3 + 5 = 9 - \square$

$4 + 2 = 8 - \square$

$3 + 3 = 7 - \square$

$9 - 4 = 3 + \square$

$8 - 1 = 4 + \square$

$10 - 2 = 6 + \square$

$4 + 4 = 10 - \square$

$4 + 1 = 8 - \square$

$2 + 2 = 7 - \square$

$6 - 4 = 2 + \square$

$9 - 3 = 4 + \square$

$10 - 3 = 5 + \square$

Aşağıdaki kutularda sonucu eşit olan işlemler verilmiştir. Sonucu eşit olanları eşleştiriniz.

$6 + 2 = 10 - 2$

$8 - 2 = 3 + 3$

$7 - 2 = 3 + 2$

$6 + 1 = 9 - 2$

$4 + 3 = 8 - 1$

$10 - 5 = 4 + 1$

$9 - 3 = 4 + 2$

$4 + 4 = 10 - 2$