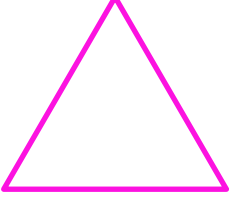


Adı :
Soyadı:

1 . Sınıf
Matematik

Geometrik Şekiller
Köşe-Kenar-2


Köşelerini gösteriniz. Kaç tane köşe var?




Benim adım

.....tane kenarım vardır.


.....tane köşem vardır.



.....
.....
.....



.....
.....
.....



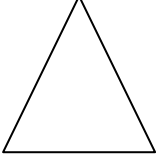
.....
.....
.....

Adı :
Soyadı:

1 . Sınıf
Matematik

Geometrik Şekiller
Köşe-Kenar-2


İsimlerini yazınız ve boyayınız.



.....



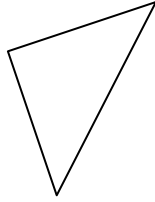
.....




.....



.....



.....



.....




.....



.....




.....




.....



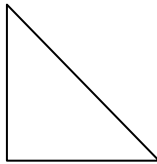
.....



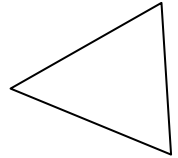
.....



.....




.....




.....



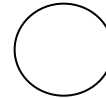
.....



.....



.....



.....



.....