

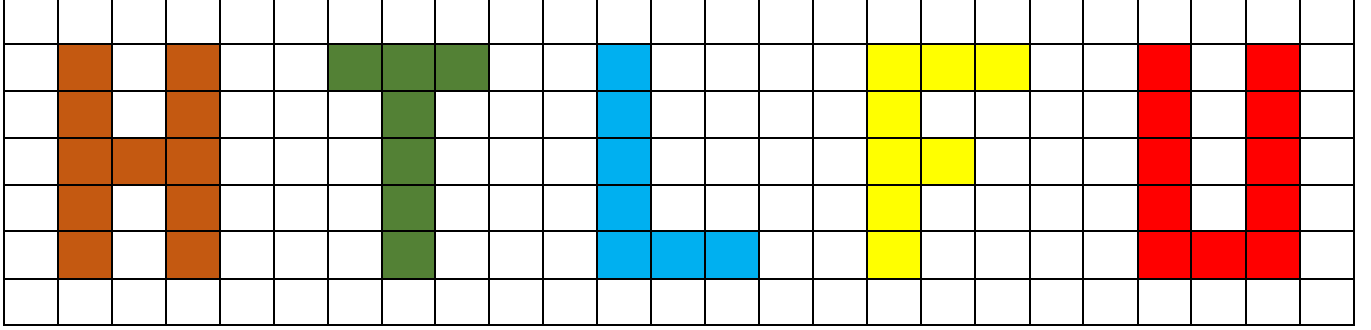


Adı Soyadı :

Numarası :

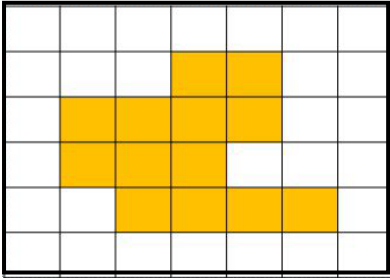
Konu: Alan Ölçme Etkinliği 1

Aşağıda verilen harflerin alanlarını kareleri sayarak kaç birim kare olduğunu altlarına yazınız.

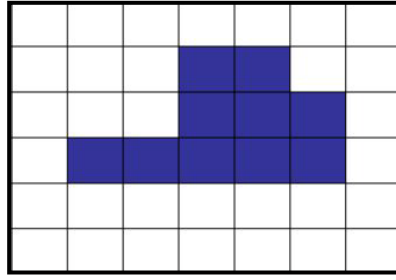


..... birim kare birim kare birim kare birim kare birim kare

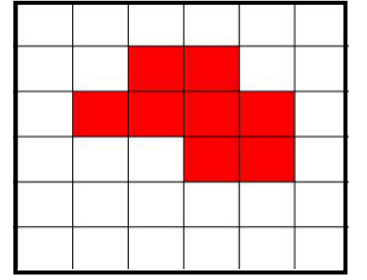
Aşağıdaki şekillerin alanlarının kaç birim kare olduğunu yazınız.



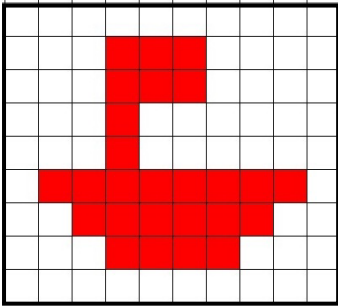
..... birim kare



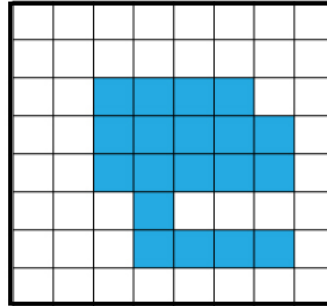
..... birim kare



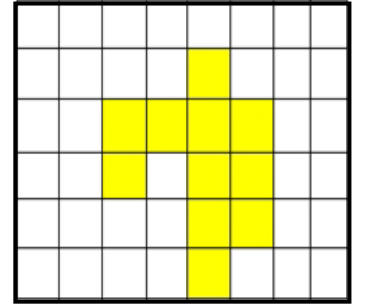
..... birim kare




..... birim kare




..... birim kare



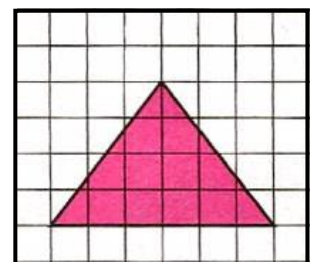
..... birim kare



..... birim kare

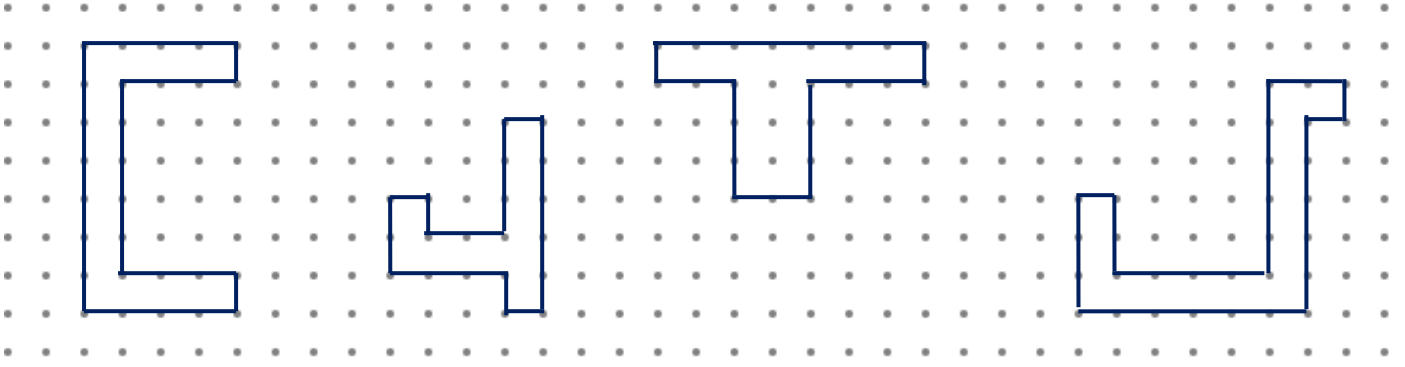


..... birim kare



..... birim kare

Aşağıdaki şekillerden alanları eşit olanları boyayınız.



Aşağıdaki krokide bir mahalledeki yapıların kapladığı alanların kaç birim kare olduğunu bulunuz.

															F	I	R	I	N				M
	O																						A
	K					P	A	R	K														R
	U																						K
	L																						E
															E	C	Z	A	N	E			T

Okul: birim kare


Market: birim kare

Fırın: birim kare

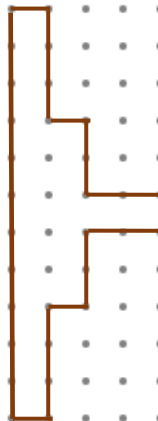
Park: birim kare

Eczane: birim kare

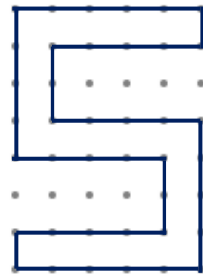
Aşağıda verilen şekillerin noktalarını birleştirerek alanlarının kaç birim kare olduklarını yazınız.



..... birim kare




..... birim kare



..... birim kare



..... birim kare



..... birim kare