


1.SINIF TOPLAMA İŞLEMİ



@gunes_ogretmenle_etkinlikler

Aşağıda verilen toplama işlemlerini yapınız



$1 + 4 =$

$2 + 3 =$

$5 + 3 =$

$4 + 3 =$

$3 + 3 =$

$4 + 5 =$

$5 + 5 =$

$4 + 4 =$

$0 + 3 =$

$5 + 6 =$

$6 + 6 =$

$1 + 7 =$

$7 + 3 =$

$7 + 7 =$

$8 + 3 =$

$7 + 6 =$

$7 + 5 =$

$8 + 2 =$

$8 + 4 =$

$5 + 8 =$

$8 + 8 =$

$9 + 1 =$

$9 + 3 =$

$4 + 9 =$

$0 + 9 =$

$5 + 9 =$

$9 + 9 =$

$10 + 3 =$

$10 + 3 =$

$14 + 3 =$

$15 + 3 =$

$12 + 3 =$

$13 + 3 =$

$16 + 3 =$

$16 + 4 =$

$15 + 5 =$

$10 + 10 =$

$19 + 1 =$

$18 + 2 =$

$17 + 3 =$

ADIM: _____

Aşağıda verilen toplama işlemlerini yapınız



$1 + 3 =$

$2 + 3 =$

$5 + 3 =$

$4 + 3 =$

$3 + 3 =$

$4 + 5 =$

$5 + 5 =$

$4 + 4 =$

$0 + 3 =$

$5 + 6 =$

$6 + 6 =$

$1 + 7 =$

$7 + 3 =$

$7 + 7 =$

$8 + 3 =$

$7 + 6 =$

$7 + 5 =$

$8 + 2 =$

$8 + 4 =$

$5 + 8 =$

$8 + 8 =$

$9 + 1 =$

$9 + 3 =$

$4 + 9 =$

$0 + 9 =$

$5 + 9 =$

$9 + 9 =$

$10 + 3 =$

$10 + 3 =$

$14 + 3 =$

$15 + 3 =$

$12 + 3 =$

$13 + 3 =$

$16 + 3 =$

$16 + 4 =$

$15 + 5 =$

$10 + 10 =$

$19 + 1 =$



$18 + 2 =$

$17 + 3 =$

1.SINIF ÇIKARMA İŞLEMİ

@gunes_ogretmenle_etkinlikler

Aşağıda verilen çıkarma işlemlerini yapınız



$5 - 3 =$

$12 - 3 =$

$15 - 5 =$

$20 - 0 =$

$6 - 3 =$

$14 - 5 =$

$16 - 5 =$

$17 - 4 =$

$5 - 5 =$

$15 - 6 =$

$16 - 6 =$

$17 - 6 =$

$7 - 3 =$

$17 - 7 =$

$18 - 3 =$

$13 - 6 =$

$7 - 5 =$

$18 - 2 =$

$18 - 4 =$

$18 - 0 =$

$8 - 8 =$

$19 - 1 =$

$19 - 3 =$

$18 - 9 =$

$10 - 9 =$

$15 - 9 =$

$20 - 5 =$

$11 - 5 =$

$10 - 3 =$

$14 - 3 =$

$20 - 3 =$

$12 - 12 =$

$13 - 3 =$

$16 - 3 =$

$20 - 4 =$

$15 - 5 =$

$14 - 10 =$

$19 - 1 =$

$15 - 10 =$

$20 - 13 =$

@gunes_ogretmenle_etkinlikler








RENKLİ BALONLARLA ÇIKARMA



Yönerge: İşlemleri yap. Doğru sonucu bul.

Sonucu bulduğun balonu, verilen renge göre boyay!

Boyama Anahtarı

	→	8
	→	10
	→	9
	→	11
	→	5

$13-5=.....$

$19-9=.....$

$12-3=.....$

$17-6=.....$

$16-8=.....$

$16-7=.....$

$11-6=.....$

$18-10=.....$

$20-10=.....$

$11-3=.....$

$11-1=.....$

$12-4=.....$

Alt Köşe Eğlencesi

$14 - 7 = \square$

$18 - 9 = \square$



DİNOZORLARLA ÇIKARMA

Yönerge: İşlemleri yap.

Dinazorları boya.

$17-4=$

$18-10=$

$10-10=$

$20-0=$

$19-9=$

$14-9=$

$15-9=$

$15-6=$

$13-3=$

Alt Köşe Eğlencesi

$18-8=$

$10-0=$

$16-6=$

$11-8=$

