

# ☆ EŞİTLİKLERİ BULALIM! ☆

$6+2$   $4+$   
 $8=8$

$+5$   $2+6$   
 $8=8$

$9$   $5+$   
 $9=9$

$7$   $4+$   
 $7=7$

$1+$   $+5$   
 $10=10$

$1+$   $2+$   
 $7=7$

$8+1$   $+3$   
 $9=9$

$+2$   $1+5$   
 $6=6$

$+2$   $3+4$   
 $7=7$

$0+10$   $+2$   
 $10=10$

$+2$   $1+5$   
 $6=6$

$+3$   $3+3$   
 $6=6$

CHAZNEDAR

$$6 + 4 = 3 +$$




$$5 + 3 = 2 +$$



$$8 + 3 = 9 +$$



$$4 + 5 = 6 +$$



$$4 + 8 = 5 +$$



$$9 + 3 = 7 +$$



$$2 + 3 = 2 +$$



$$8 + 2 = 1 +$$

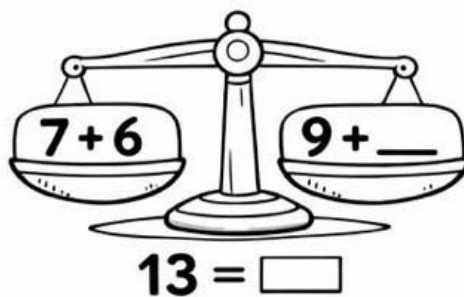
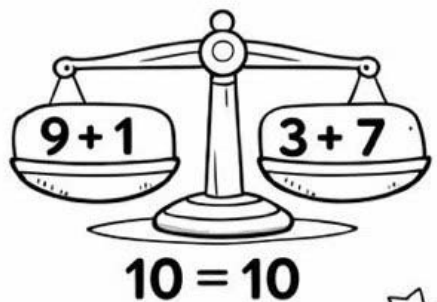
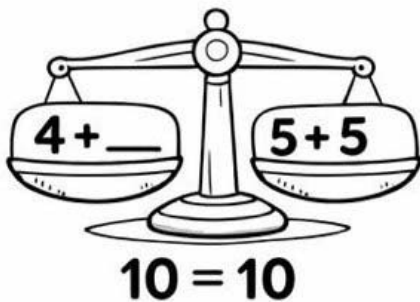
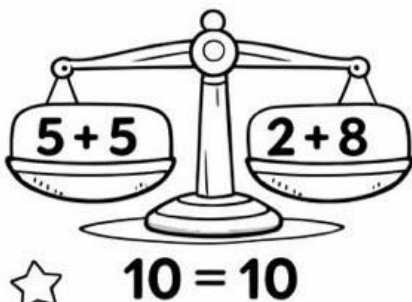
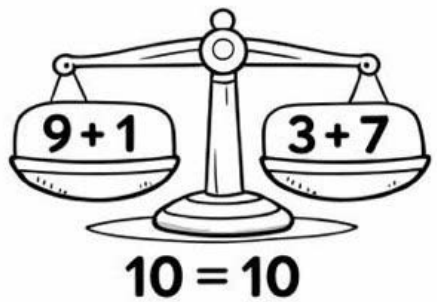
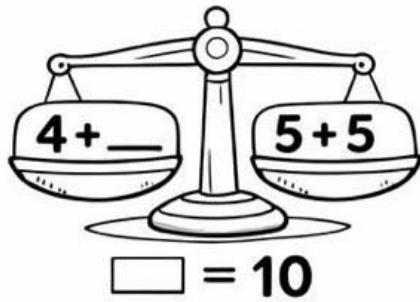
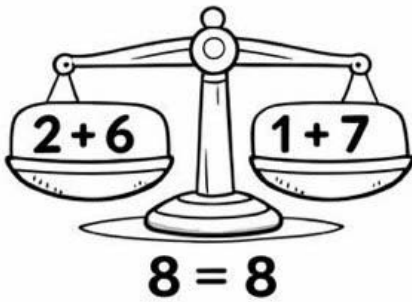
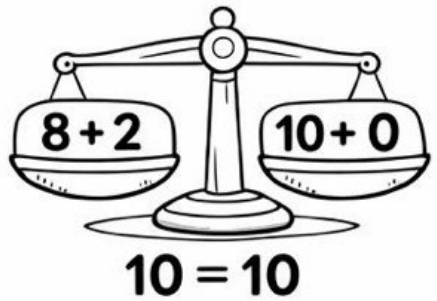
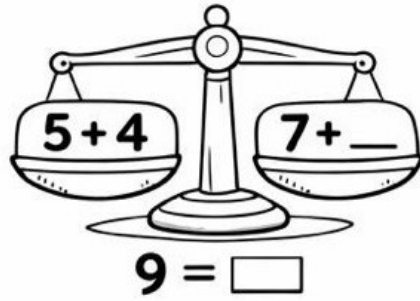
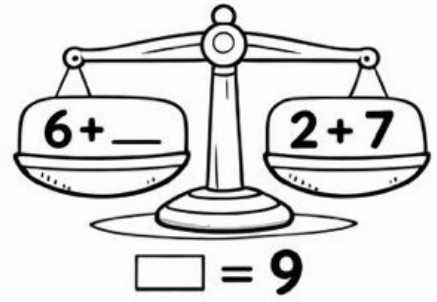
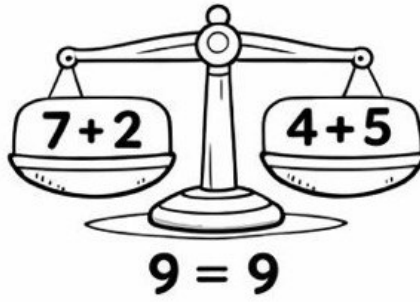



$$5 + 5 = 6 +$$



$$2 + 6 = 5 +$$






CHAZNEDAR


# Eşitlik Terazisi Etkinliği

Aşağıdaki işlemlerde teraziyi dengelemek için boşluklara uygun sayıyı yaz!

①  $7 + 3 = 4 + \square$




②  $6 + 2 = 5 + \square$




③  $9 + 1 = 6 + \square$




④  $5 + 4 = 3 + \square$




⑤  $8 + 2 = 7 + \square$




⑥  $4 + 6 = 5 + \square$




⑦  $3 + 5 = 2 + \square$



⑧  $7 + 1 = 4 + \square$



⑨  $2 + 6 = 3 + \square$



⑩  $9 + 0 = 8 + \square$



Adım: \_\_\_\_\_

CHAZNEDAR




# Eşitlik Terazisi Etkinliği

Aşağıdaki işlemlerde teraziyi dengelemek için boşluklara uygun sayıyı yaz!

①  $8 + 1 = 5 + \square$




②  $6 + 7 = 10 + \square$




③  $11 + 3 = 12 + \square$




④  $9 + 5 = 8 + \square$



⑤  $7 + 4 = 6 + \square$




⑥  $4 + 9 = 7 + \square$



⑦  $2 + 5 = 1 + \square$




⑧  $5 + 6 = 4 + \square$



⑨  $10 + 4 = 13 + \square$



⑩  $7 + 8 = 6 + \square$



Adım: \_\_\_\_\_

CHAZNEDAR

