


Adı:.....

Soyadı:.....

SAATLER SINAVI

Verilen saatleri ve okunuşlarını altlarına yazın. (25 PUAN)




.... :



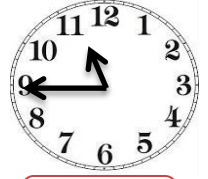
.... :



.... :




.... :




.... :


Verilen saatlerin akrep ve yelkovanlarını çizin, okunuşlarını yazın. (25 PUAN)




09:45




11:30



04:15




01:00




08:45


Okunuşları verilen saatleri dijital ve analog olarak gösterin. (25 PUAN)




.... :



.... :



.... :



.... :



.... :

Biri çeyrek geçiyor

Üçe çeyrek var

Saat dört buçuk

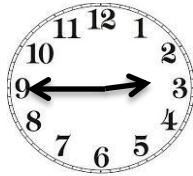
Saat tam on

Beşe çeyrek var

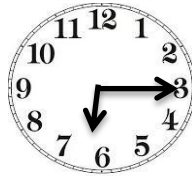
Verilen analog ve dijital saatleri eşleştirin. (25 PUAN)




1



2



3



4



5

04:30

08:45

02:45

02:00

06:15