
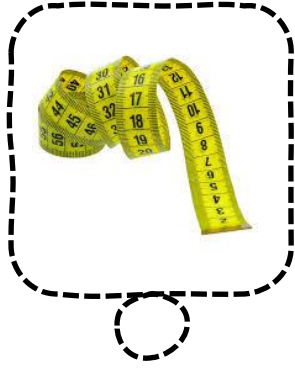




KÜTLE - TARTMA ETKİNLİĞİ ETKİNLİĞİ





Adı Soyadı.....

Veli İmzası:.....

Varlıkların ağırlıklarını ölçen araçları işaretleyelim.



Aşağıdaki varlıklardan ağırlığı baskül, terazi gibi araçlarla ölçülebilenleri işaretleyelim.



Terazilerin eřit olabilmesi için hangi ağırlık konmalıdır, işaretleyin.

