

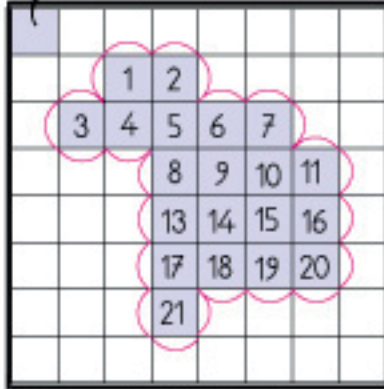
DÜZLEMSEL ŞEKİLLERİN ALANI



Aşağıda verilen birim kareli kâğıttaki düzlemsel şekillerin alanlarını ve çevrelerini örnekteki gibi bulalım.

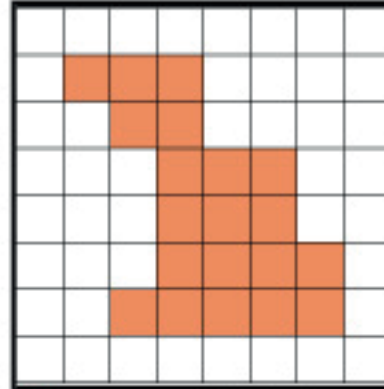
örnek

birim kare



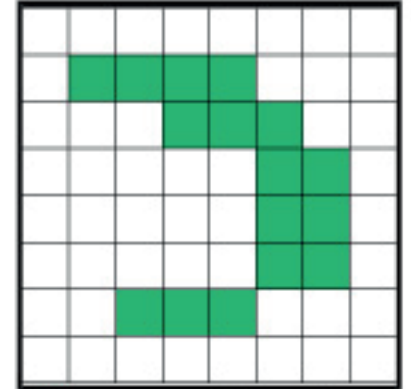
Alan: 21 birim kare

Çevre: 24 birim



Alan:birim kare

Çevre:birim

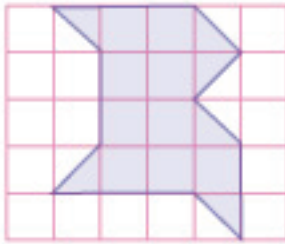


Alan:birim kare

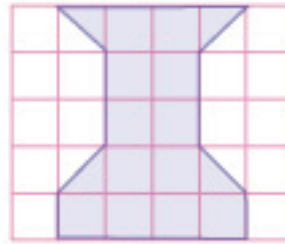
Çevre:birim



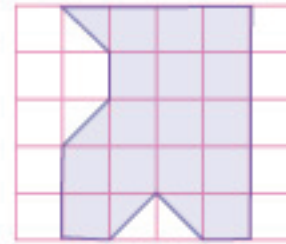
Aşağıda verilen birim kareli kâğıttaki düzlemsel şekillerin alanlarını bulalım.



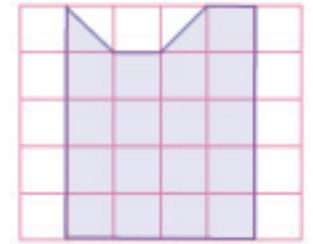
.....birim kare



.....birim kare



.....birim kare

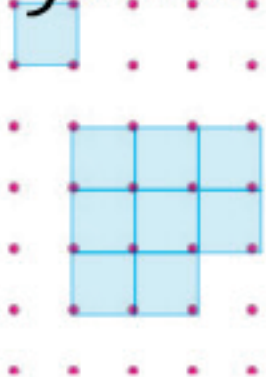


.....birim kare



Aşağıda verilen noktali kâğıttaki düzlemsel şekillerin alanlarını bulalım.

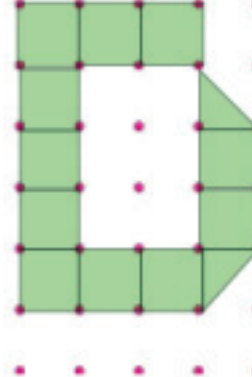
birim kare



.....birim kare



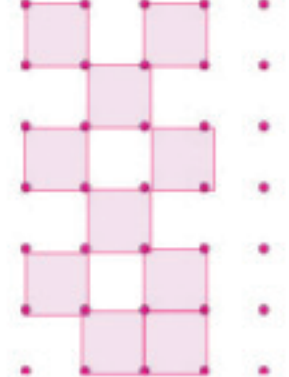
.....birim kare



.....birim kare



.....birim kare




.....birim kare

Aşağıdaki şekillerin alanlarını bulunuz altlarındaki kutulara yazınız.

 = yarım birim kare


 = birim kare

1)




birim kare

2)




birim kare

3)




birim kare

4)



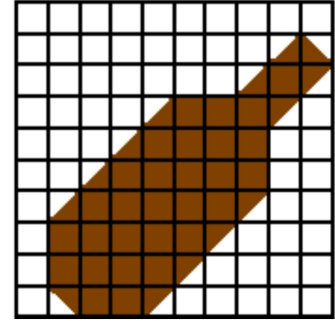
birim kare

5)



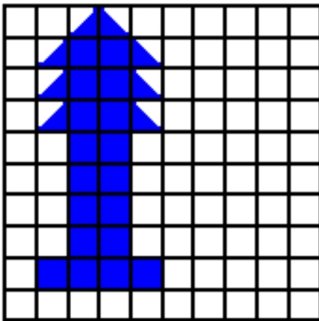
birim kare

6)



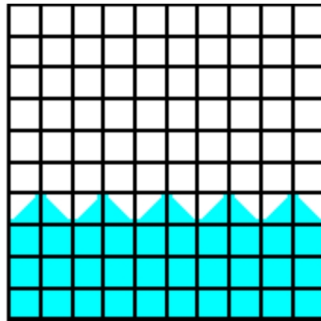
birim kare

7)




birim kare

8)



birim kare

9)



birim kare