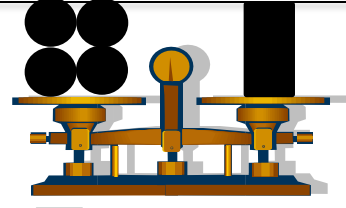
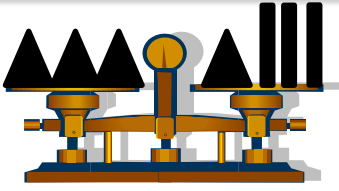


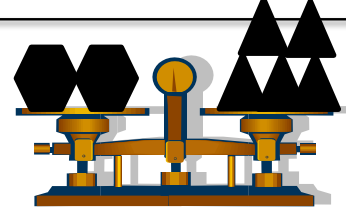
Yukarıdaki ● 8 kg ise, ■ kaç kilogramdır?



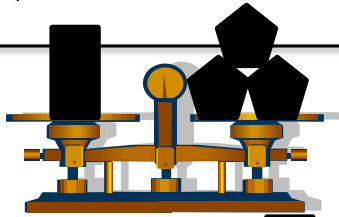
Yukarıdaki ■ 20 kg ise, ● kaç kilogramdır?



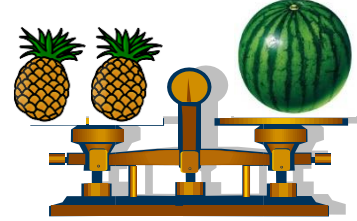
Yukarıdaki ▲ 6 kg ise, ■ kaç kilogramdır?



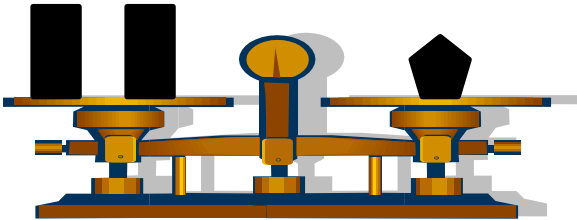
Yukarıdaki ● 10 kg ise, ▲ kaç kilogramdır?



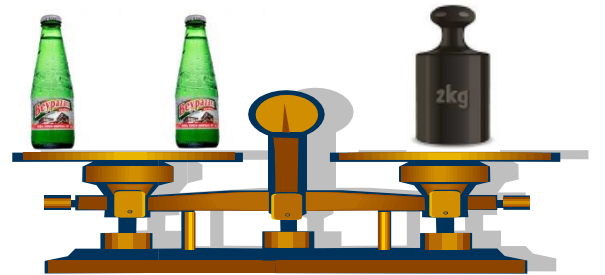
Yukarıdaki ● 9 kg ise, ■ kaç kilogramdır?



Yukarıdaki bir ananas 7 kg ise, karpuz kaç kilogramdır?



Verilen üç cismin toplam ağırlığı 30 ise, ■ kaç kilogramdır?



Maden şişesi kaç kilogramdır?