


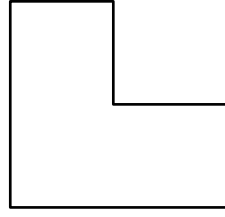


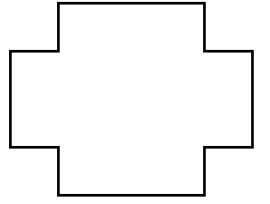
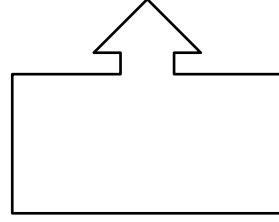
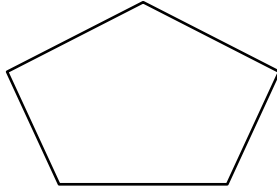
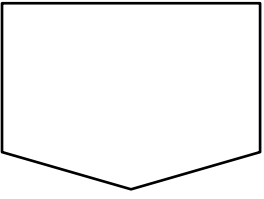

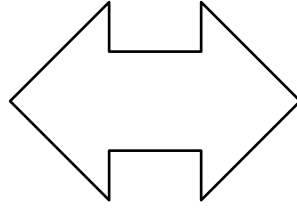

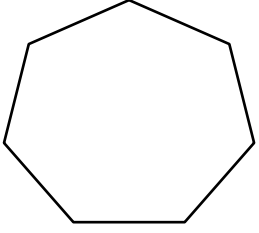
Adı:.....

Soyadı:.....

## SİMETRİ ETKİNLİĞİ

Veli imzası

Aşağıda verilen şekillerin simetri çizgisini çizin, meydana gelen parçaları boyayın.



Aşağıdaki harflerden simetrik olanların simetri eksenini çizin.



Aşağıda verilen şekillerin simetrisi yanlarına çizin.

