

SİMETRİ ETKİNLİĞİ

Adı Soyadı.....

Veli İmzası.....

Verilen harflerden simetrik olanların simetri çizgi veya çizgilerini çizin.

A

B

C

Ç

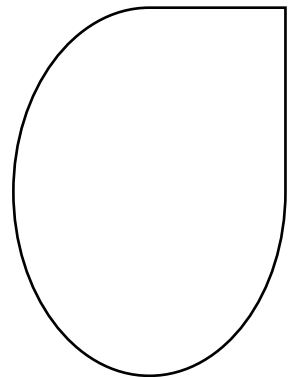
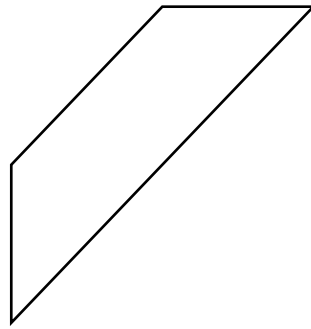



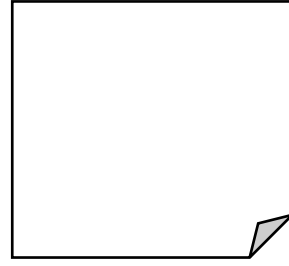

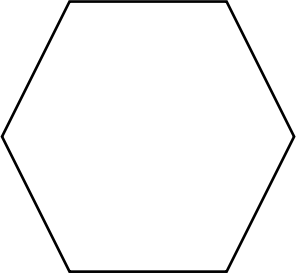
D

E

F

G

Verilen şekillerden simetrik olanların simetri çizgi veya çizgilerini çizin



Verilen şekillerin yanlarına simetrilerini çizin.

