




Konu: Saatler

Kazanım 1: Zamanı dakika ve saat cinsinden söyler, okur ve yazar. 2: Zaman ölçme birimleri arasındaki ilişkiyi açıklar.


## Saatler

Aşağıdaki saatlerin öğleden önce ve öğleden sonra okunuşlarını altlarına yazalım.



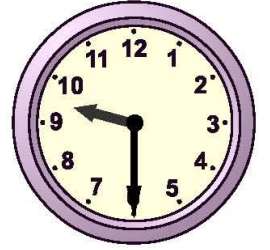
Öğleden önce saat: ..... . ....

Öğleden sonra saat : ..... . ....



Öğleden önce saat: ..... . ....

Öğleden sonra saat : ..... . ....



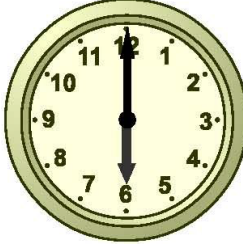
Öğleden önce saat: ..... . ....

Öğleden sonra saat : ..... . ....




Öğleden önce saat: ..... . ....

Öğleden sonra saat : ..... . ....



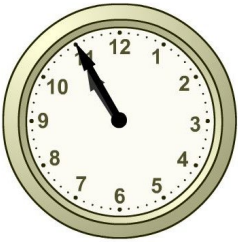
Öğleden önce saat: ..... . ....

Öğleden sonra saat : ..... . ....



Öğleden önce saat: ..... . ....

Öğleden sonra saat : ..... . ....



Öğleden önce saat: ..... . ....

Öğleden sonra saat : ..... . ....



Öğleden önce saat: ..... . ....


Öğleden sonra saat : ..... . ....




Öğleden önce saat: ..... . ....

Öğleden sonra saat : ..... . ....


Aşağıdaki saatlere belirtilen zamana göre akrep ve yelkovan çizelim.




06.00




18.15



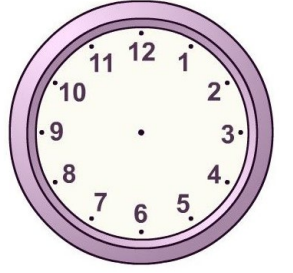
21.45




09.05




03.45




12.30



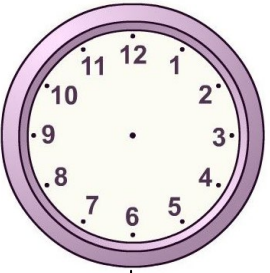
22.40




10.15




01.30



19.10



05.45



23.40