




Adı Soyadı :

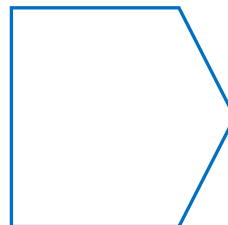
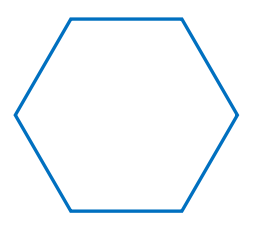



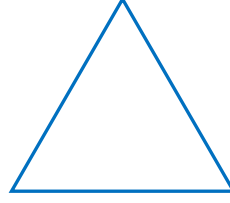
Numarası :

Konu: Kesirler (Bütün, yarım ve Çeyrek) Etkinliği 3

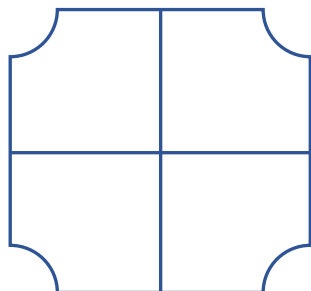
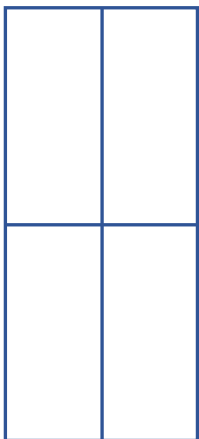
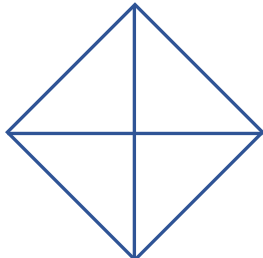
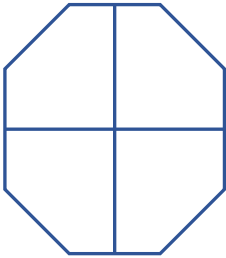
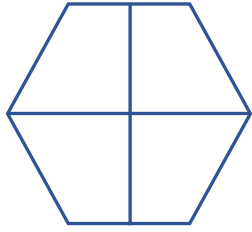
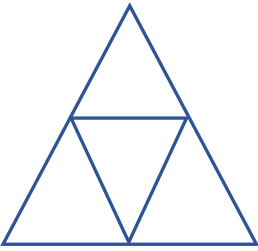

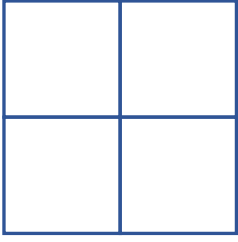
Aşağıdaki görselleri verilen nesnelerin altlarına bütün, yarım ve çeyrek ifadelerinden uygun olanı yazınız




Aşağıda verilen geometrik şekillerin yarısını boyayınız.




Aşağıda verilen geometrik şekilleri çeyreğini boyayınız.




Aşağıda cümleleri görsellere göre tamamlayınız.




1 bütün elma,
2 yarım elma eder.



.... bütün elma,
.... yarım elma eder.



.... yarım karpuz,
.... bütün karpuz eder.



.... çeyrek elma,
.... bütün elma eder.



.... yarım incir,
.... bütün incir eder.



.... bütün nar,
.... yarım nar eder.



.... çeyrek karpuz,
.... bütün karpuz eder.